

The Atoms Family
Atomic Math Challenge

Name _____

8		_____
O		_____
Oxygen		_____
15.999		_____

Atomic number equals
the number of

_____ **or** _____

Atomic mass equals
the number of

_____ + _____

8
O

15.999

Atomic # = _____

Atomic Mass = _____

of Protons = _____

of Neutrons = _____

of Electrons = _____

30

Zinc
65.39

Atomic # = _____

Atomic Mass = _____

of Protons = _____

of Neutrons = _____

of Electrons = _____

3
Li

6.941

Atomic # = _____

Atomic Mass = _____

of Protons = _____

of Neutrons = _____

of Electrons = _____

14

Silicon
28.086

Atomic # = _____

Atomic Mass = _____

of Protons = _____

of Neutrons = _____

of Electrons = _____

5
B

10.81

Atomic # = _____

Atomic Mass = _____

of Protons = _____

of Neutrons = _____

of Electrons = _____

35

Bromine
79.904

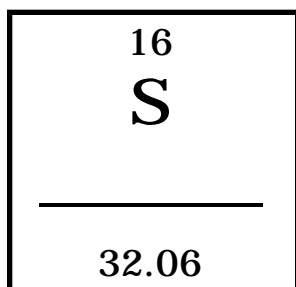
Atomic # = _____

Atomic Mass = _____

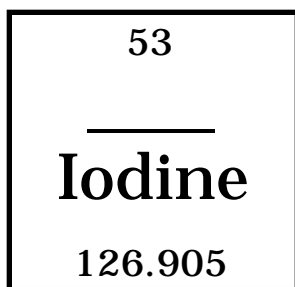
of Protons = _____

of Neutrons = _____

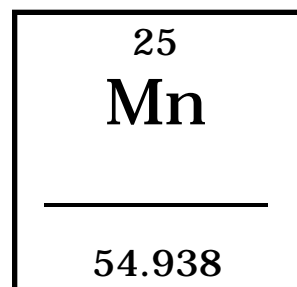
of Electrons = _____



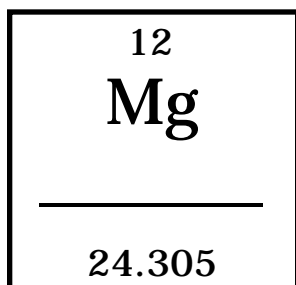
Atomic # = _____
 Atomic Mass = _____
 # of Protons = _____
 # of Neutrons = _____
 # of Electrons = _____



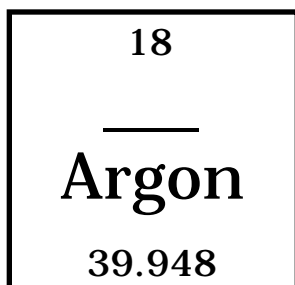
Atomic # = _____
 Atomic Mass = _____
 # of Protons = _____
 # of Neutrons = _____
 # of Electrons = _____



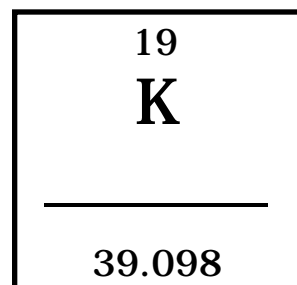
Atomic # = _____
 Atomic Mass = _____
 # of Protons = _____
 # of Neutrons = _____
 # of Electrons = _____



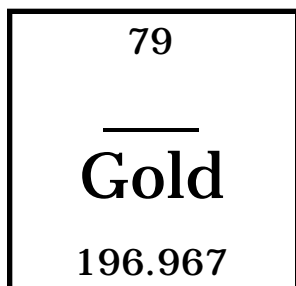
Atomic # = _____
 Atomic Mass = _____
 # of Protons = _____
 # of Neutrons = _____
 # of Electrons = _____



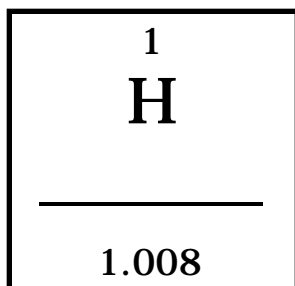
Atomic # = _____
 Atomic Mass = _____
 # of Protons = _____
 # of Neutrons = _____
 # of Electrons = _____




Atomic # = _____
 Atomic Mass = _____
 # of Protons = _____
 # of Neutrons = _____
 # of Electrons = _____



Atomic # = _____
 Atomic Mass = _____
 # of Protons = _____
 # of Neutrons = _____
 # of Electrons = _____



Atomic # = _____
 Atomic Mass = _____
 # of Protons = _____
 # of Neutrons = _____
 # of Electrons = _____



Atomic # = _____
 Atomic Mass = _____
 # of Protons = _____
 # of Neutrons = _____
 # of Electrons = _____